

COMPARE NUMBER SENTENCES



GET READY



1) This symbol $>$ means

2) Let's compare 5 \bigcirc 8

3) Write a number less than 4

4) Compare

●	●	●	●	●
●	●	●		

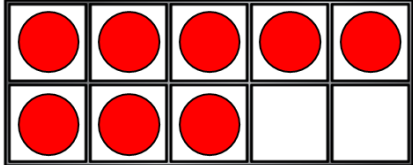

 \bigcirc

●	●	●	●	●
●	●	●	●	

1) This symbol $>$ means **Greater than**

2) Let's compare $5 < 8$


3) Write a number less than 4 **3, 2, 1, 0**

4) Compare  $<$ 

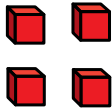

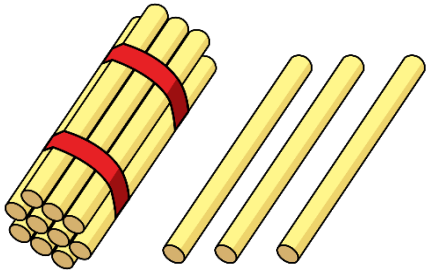
LET'S LEARN



Greater than or less than



is less than



is greater than



Let's use symbols to compare!

11	12	13	14	15	16	17	18	19	20
----	----	----	----	----	----	----	----	----	----

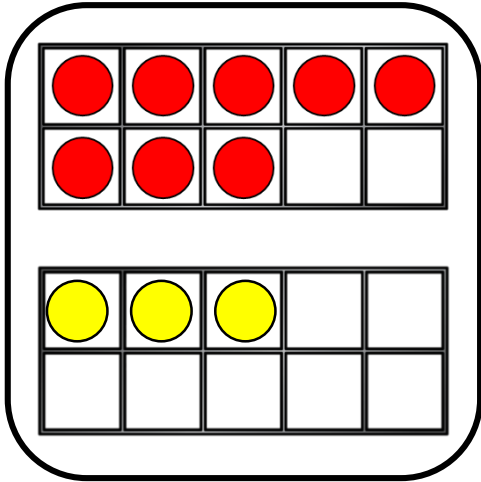
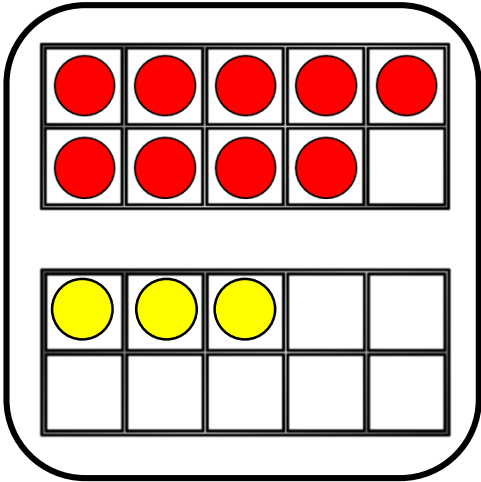
$>$ $=$ $<$

15 $>$ fourteen

eleven $<$ 1 ten and 9 ones

$10 + 8$ $=$ eighteen

Comparing number sentences



$$9 + 3$$



$$8 + 3$$

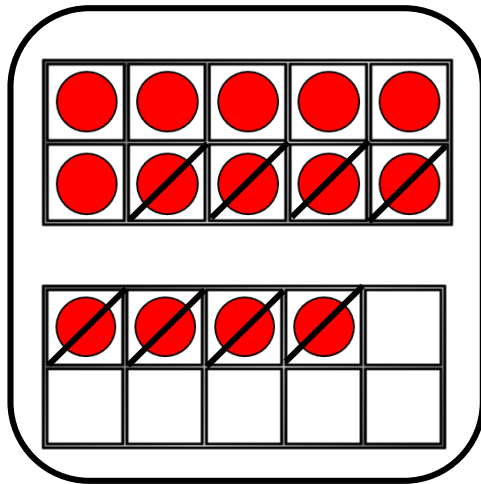
is greater
than

YOUR TURN

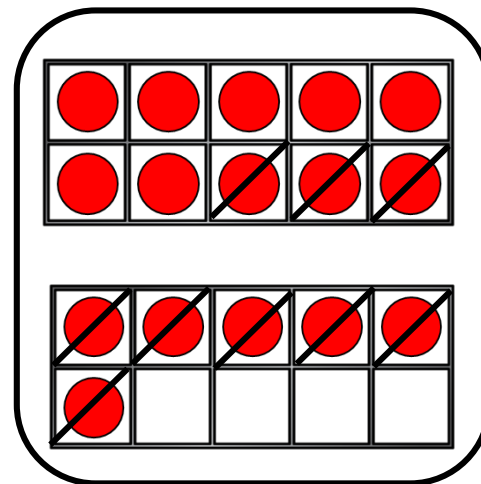
Have a go at question 1
on the worksheet



Comparing number sentences



$$14 - 8$$




$$16 - 9$$

is less
than

YOUR TURN

Have a go at question 2
on the worksheet





I answer both sides first, then I put in the symbol!

	<	=	>	
15	$12 + 3$	<input type="radio"/>	$12 + 4$	16
15	$12 + 3$	<input type="radio"/>	$12 - 3$	9
15	$12 + 3$	<input type="radio"/>	$13 + 2$	15



I don't need to answer both sides every time. Look carefully!

What is the same? What is different?

	<	=	>
$11 + 9$	○		$11 + 5$
$11 + 9$	○		$11 - 9$
$11 + 9$	○		$12 + 8$

YOUR TURN

Have a go at question 3
on the worksheet





Think carefully!
What can you do to
make them equal?

17

$13 + 4$

=

$20 - \bullet$

$13 + 4$

=

$19 - \bullet$

$13 + 4$

=

$\bullet - \bullet$

YOUR TURN

Have a go at question 4
on the worksheet

